

Area Model of Multiplication

$$35 \times 5$$

1. write the factors in expanded form $30 + 5 \times 5$

2. Draw the columns and rows

3. Multiply

x	30	5	
5	150	25	= 175

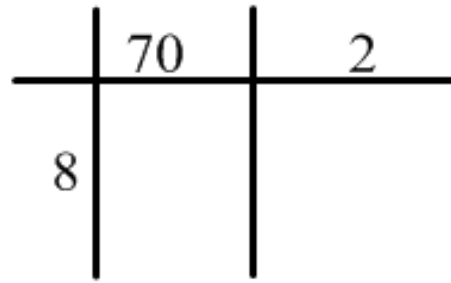
4. Circle the answers you just got

5. Solve by adding: $\left. \begin{array}{l} \text{I have 1 hundred} \\ \text{7 tens} \\ \text{5 ones} \end{array} \right\} 175$

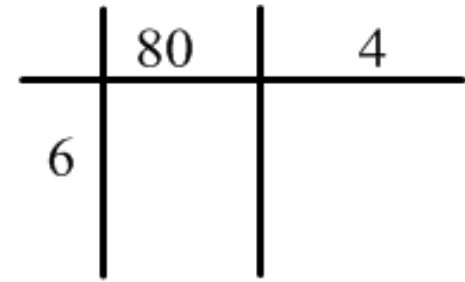




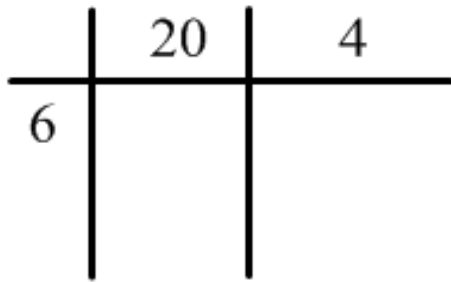
72×8



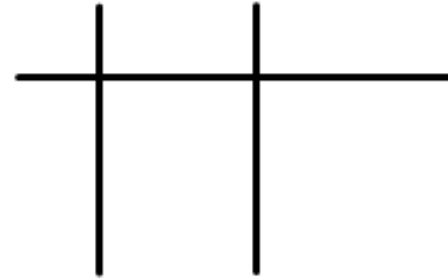
84×6



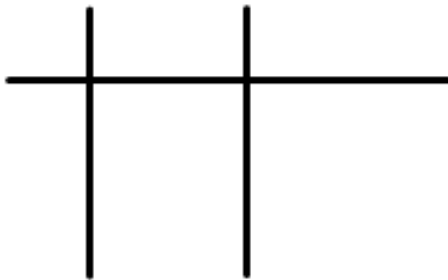
$24 \times 6 =$



26×9



45×3



33×9

